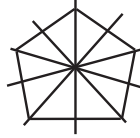




# Symmetry



How many lines of symmetry does each figure have?



Is the dashed line a line symmetry? Write yes or no.



Children may have difficulty understanding that a line of symmetry in a pentagon passes through the mid-point of a side and the opposite vertex. Place a pocket mirror upright along a line of symmetry to show how the reflection completes the figure.