












Making 10







Color some fish green, and write the correct numbers in the boxes.


 green 6 white
 4 + 6 = 10



 green white
 + = 10



 green white
 + = 10



 green white
 + = 10

green white
 + = 10

green white
 + = 10

Write the missing numbers in the boxes to make 10.

$10 + \boxed{0} = 10$

$6 + \boxed{} = 10$

$2 + \boxed{} = 10$

$9 + \boxed{} = 10$

$5 + \boxed{} = 10$

$1 + \boxed{} = 10$

$8 + \boxed{} = 10$

$4 + \boxed{} = 10$

$0 + \boxed{} = 10$

$7 + \boxed{} = 10$

$3 + \boxed{} = 10$

The number of items shaded and the number of items unshaded must match the numbers written in the answer boxes. For the bottom activity, find out whether children have noticed the pattern as it develops.